


Name _____

Number of the Day



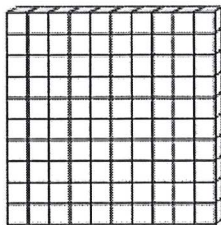
Number in words:

The number before:

The number after:

Even or Odd:


Shade it in:



Tally it:

Name _____

Number of the Day




Number in words:

The number before:

The number after:

Even or Odd:


Shade it in:



Tally it:

Name _____

Number of the Day



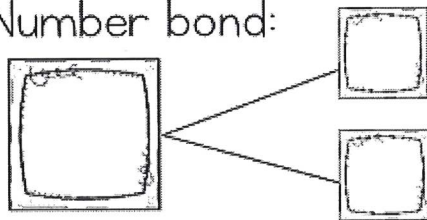
Count forwards

--	--	--	--	--

Count backwards

--	--	--	--	--

Number bond:



Ten more/Ten less:

Number Sentences:

$$+ \quad =$$


$$- \quad =$$

Number line:



Name _____

Number of the Day



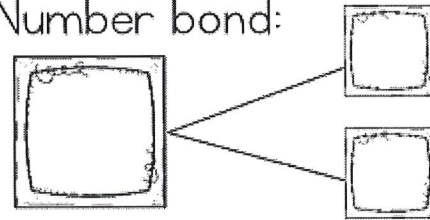
Count forwards

--	--	--	--	--

Count backwards

--	--	--	--	--

Number bond:




Ten more/Ten less:

Number Sentences:

$$+ \quad =$$



$$- \quad =$$

Number line:

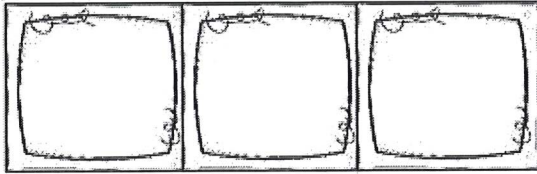


Name _____

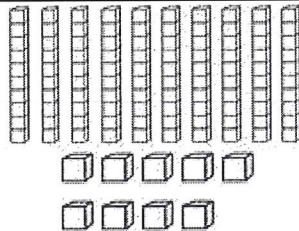

Number of the Day



Hundreds Tens Ones




Color it



Expanded Form:

10 more/10 less:



Number Sentences:

+ =


- =

Greater than/Less than:




Name _____

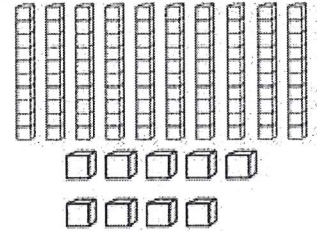
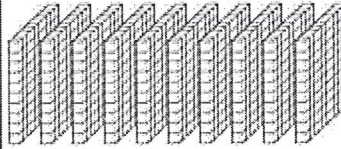
Number of the Day



Hundreds Tens Ones

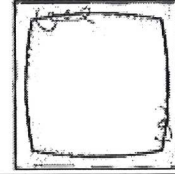


Color it



Expanded Form:

10 more/10 less:



Number Sentences:

+ =

- =

Greater than/Less than:

